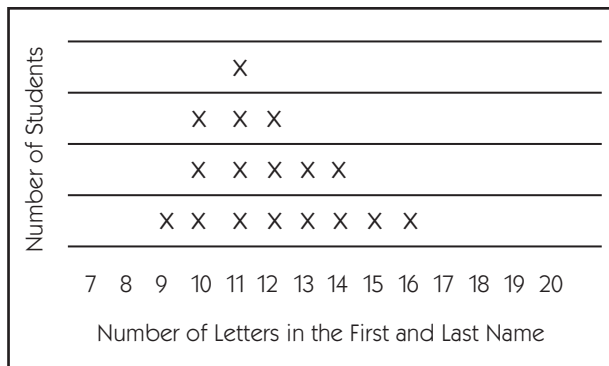



Number Corner Checkup 3 page 5 of 7

17 In October, Mr. Deerwater's students collected data about their names. Here are their results after the first week. What is the range, the mode, and the median of their data so far?





Range = ____ Mode = ____ Median = ____

18 List the temperatures shown on these 3 thermometers and then find the mean. Show your work.



9:00 AM temperature _____
 12:00 noon temperature _____
 3:00 PM temperature _____
 Mean (average): _____

19 Mark watched a movie with his sister. The first clock shows when the movie started and the second clock shows when it ended. How long did the movie last?



1 hour and 15 minutes

1 hour and 20 minutes

1 hour and 35 minutes

2 hours and 15 minutes