



# How Many Spots on a Ladybug?

Story by Allyn Fisher · Art by Jami Smith

## How Many Spots on a Ladybug?

*Story by Allyn Fisher*

*Art by Jami Smith*

The Math Learning Center, PO Box 12929, Salem, Oregon 97309  
(800) 575-8130 • [www.mathlearningcenter.org](http://www.mathlearningcenter.org)

© 2017 by The Math Learning Center

All rights reserved.

Printed in the United States of America.

First Printing 2017

**This story is excerpted from the read-aloud books included in the Bridges in Mathematics Pre-K curriculum. This math-rich collection features theme-based counting and numeral recognition, sequencing, shapes and locations, and very early addition and subtraction. For more information about these books, including how to order the full printed collection of nine titles, visit [store.mathlearningcenter.org/bridges-2nd-edition/2bpkread.asp](http://store.mathlearningcenter.org/bridges-2nd-edition/2bpkread.asp).**

The Math Learning Center is a nonprofit organization serving the education community. Our mission is to inspire and enable individuals to discover and develop their mathematical confidence and ability. We offer innovative and standards-based professional development, curriculum, materials, and resources to support learning and teaching. To find out more, visit us at [www.mathlearningcenter.org](http://www.mathlearningcenter.org).

# How Many Spots on a Ladybug?

Story by Allyn Fisher · Art by Jami Smith



Some ladybugs have no spots at all. Others have 20 spots. Most ladybugs have more than 0 spots, but fewer than 20.

The spots on a ladybug help protect it from predators. The spots send a message to birds, lizards, frogs, spiders, and other animals that says, "Don't eat me... I taste nasty!"

Solve the problems in this book to find out how many spots on each ladybug.



Add with me,  
Count with me.  
How many spots  
do you think we'll see?



$$1 + 1$$


●				
●				

$$1 + 1 = 2$$




This ladybug  
has 2 spots.


Add with me,  
Count with me.  
How many spots  
do you think we'll see?



$$2 + 2$$




$$2 + 2 = 4$$




This ladybug  
has 4 spots.




Add with me,  
Count with me.  
How many spots  
do you think we'll see?



$$3 + 3$$




$$3 + 3 = 6$$




This ladybug  
has 6 spots.


Add with me,  
Count with me.  
How many spots  
do you think we'll see?



$$4 + 4$$




$$4 + 4 = 8$$




This ladybug  
has 8 spots.


Add with me,  
Count with me.  
How many spots  
do you think we'll see?



$$5 + 5$$




$$5 + 5 = 10$$



This ladybug  
has 10 spots.



Published by  
 The MATH LEARNING CENTER  
Salem, Oregon